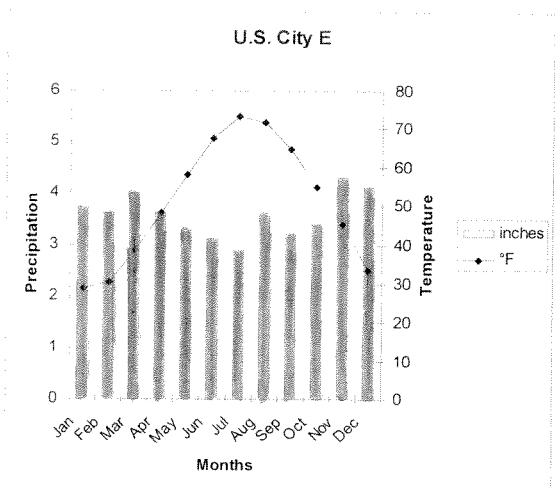
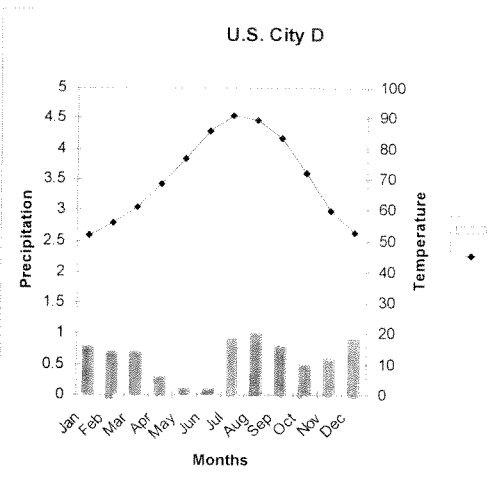
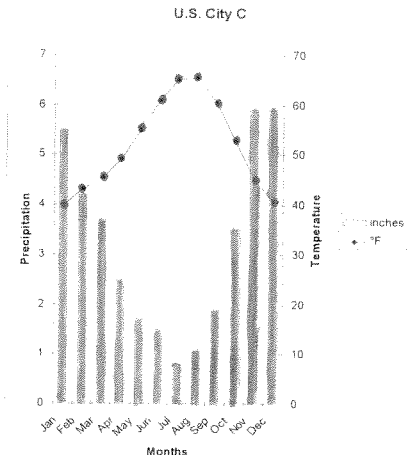
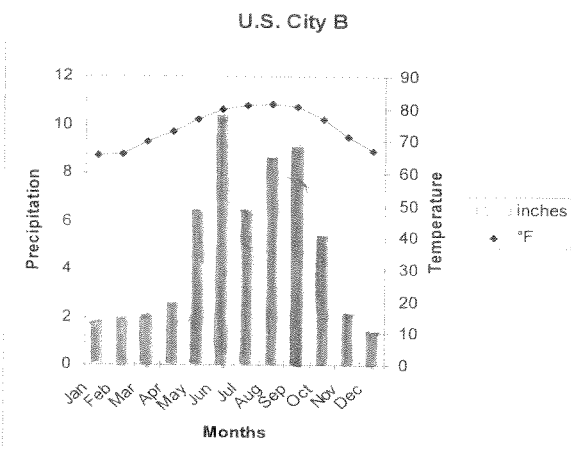
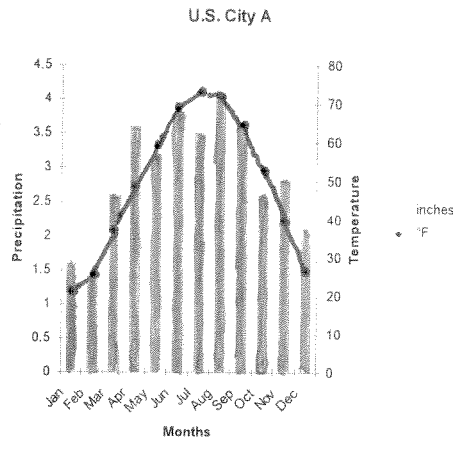


# What Can You Say About the Climate of These Cities?

Using the Climate Zones from "The Physical World" PPT, make an educated guess for the correct zones for cities A-E.



First, circle the letter of 3 of the cities you would like to analyze.

Second, complete #1-10 for each city you chose.

Climographs of U.S. Cities

Name(s) \_\_\_\_\_

A B C D E

A B C D E

A B C D E

1. What is the warmest month at your location? \_\_\_\_\_
2. What is the average temperature of the coldest month at your location? \_\_\_\_\_
3. Remembering that temperatures vary a great deal during the day, do you think the temperature goes below 32°F or 0°C at any time in April at your location? Why or why not?

4. What is the driest month at your location? \_\_\_\_\_
5. Is this a good place to visit for a warm-weather winter vacation? \_\_\_\_\_
6. Do they sell many snowmobiles in winter at this location? \_\_\_\_\_
7. What kind of crops could grow at this location without irrigation? Explain your choices.

8. What kind of natural vegetation would you expect to find at your location?
9. Do you think flooding is a serious risk at this location? Why?

10. Based on your knowledge of the geography of the United States, where do you think this location is? Explain.

11. Could any of the following be your location? Circle the possibilities.

- |           |               |             |
|-----------|---------------|-------------|
| Anchorage | Atlanta       | Boston      |
| Chicago   | Denver        | Des Moines  |
| Duluth    | Houston       | Los Angeles |
| Miami     | New York City | Phoenix     |
| Seattle   |               |             |

\*Write the name on the lines at the top of the page.